

**SECONDARY SCHOOL ANNUAL EXAMINATIONS 2007**

Educational Assessment Unit – Education Division

---

**FORM 1**

**MATHEMATICS – Scheme C**  
**(Non-Calculator Paper)**

**TIME: 45 minutes**

---

Question	1	2	3	4	5	6	7	8	9	10	11	12	Total
Mark													

**DO NOT WRITE ABOVE THIS LINE**

---


Name : \_\_\_\_\_

Class : \_\_\_\_\_

**INSTRUCTIONS TO CANDIDATES**

- Answer all questions.
  - This paper carries 40 marks.
  - Calculators and protractors are not allowed.
-

1. Joe has a piece of string 180 cm long.  
He cuts it up into 6 **equal** pieces.  
How long is **one** of the pieces?



\_\_\_\_\_ cm

(2 Marks)


2. Mary buys one ice-cream for each of her **4** friends.  
One ice-cream costs **23 cents**.  
How much does she spend in all?



\_\_\_\_\_ cents

(2 Marks)

3. Shade in all the **multiples of 3**.



(4 Marks)

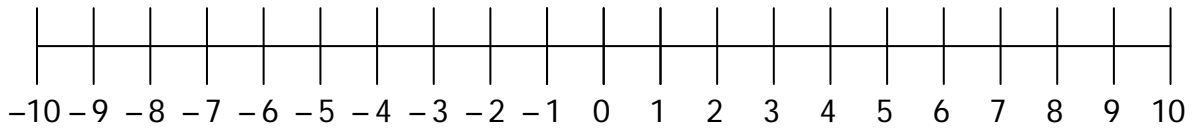
4. At **8:15 a.m.** we started waiting for Bus Number **10**.  
Bus Number 2 came after **20 minutes**.  
After another **15 minutes**, Bus Number **10** arrived.  
**At what time** did **Bus Number 10** arrive?



\_\_\_\_\_ a.m.

(4 Marks)

5. Use the **number line** to work out the questions.



(a) What number is three **more** than four? \_\_\_\_\_

(b) What number is five **less** than two? \_\_\_\_\_

(c) Work out: (i)  $(+ 4) + (- 1)$  \_\_\_\_\_

(ii)  $(- 4) + (- 4)$  \_\_\_\_\_

---

(4 Marks)

6. Work out:

(a)  $4 \times 2 + 2 \times 3$

(b)  $2 + 15 \div 3$

\_\_\_\_\_

\_\_\_\_\_

---

(4 Marks)

7. Work out:

(a)  $6 \times 20$

\_\_\_\_\_

(b)  $6 \times 3$

\_\_\_\_\_

(c) Now work out  $6 \times 23$ .

\_\_\_\_\_

---

(3 Marks)

8. Draw a sketch using these **LOGO** commands. The turtle is at the starting position.

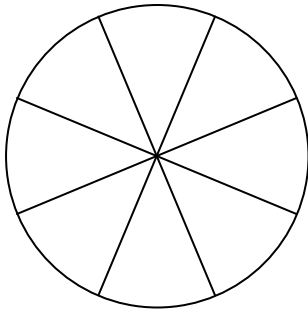
**PD**  
**FD 100**  
**RT 90**  
**FD 100**  
**LT 90**  
**FD 100**



---

(4 Marks)

9.



(a) **Shade**  $\frac{1}{4}$  of the whole circle.

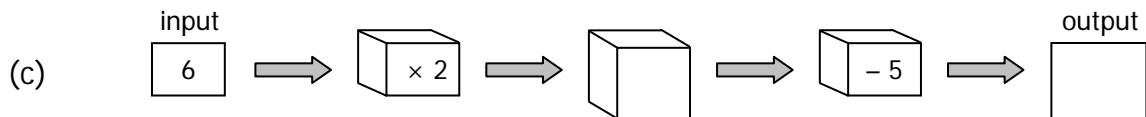
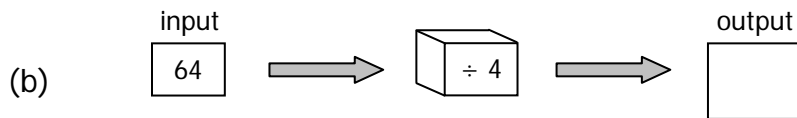
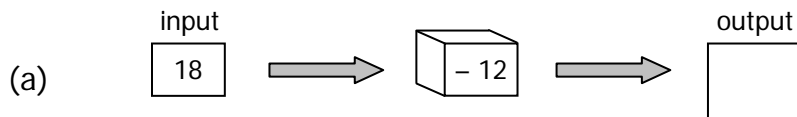
(b) Use a different colour and **shade**  $\frac{1}{2}$  of the whole circle.

(c) What fraction of the whole circle is **not shaded**?

\_\_\_\_\_

(3 Marks)

10. Fill in these number (function) machines:



(4 Marks)


11. From this list of numbers, pick out 4 different **pairs** of numbers that add up to **40**.

**15, 29, 5, 10, 20, 11, 30, 20, 35, 25**

<b>Example</b>	15	+	25	= 40
(a)		+		= 40
(b)		+		= 40
(c)		+		= 40
(d)		+		= 40

(4 Marks)

12.




Maria builds this shape using blocks. Each block is  $1 \text{ cm}^3$ .

What is the volume of the shape?

\_\_\_\_\_  $\text{cm}^3$

(2 Marks)

**End of Paper**



# SECONDARY SCHOOL ANNUAL EXAMINATIONS 2007

Educational Assessment Unit –Education Division

FORM 1

MATHEMATICS - Scheme C  
(Main Paper)

Time: 1h 15min

Question	1	2	3	4	5	6	7	8	9	10	11	12	13	Total Main	Non- Calc.	Global Mark
Mark																

**DO NOT WRITE ABOVE THIS LINE**

Name : \_\_\_\_\_

Class : \_\_\_\_\_

**ANSWER ALL QUESTIONS.**

1. Enter **20** on your calculator.

(a) **Divide** by 4. What is the 5 worth?


\_\_\_\_\_

(b) **Divide** the answer by 4 again. What is the 5 worth now?

\_\_\_\_\_

(c) **Multiply** the answer by 2. What is the 5 worth now?

\_\_\_\_\_



(3 Marks)

2. (a) Jonathan is in a shop. **Complete** the bill.

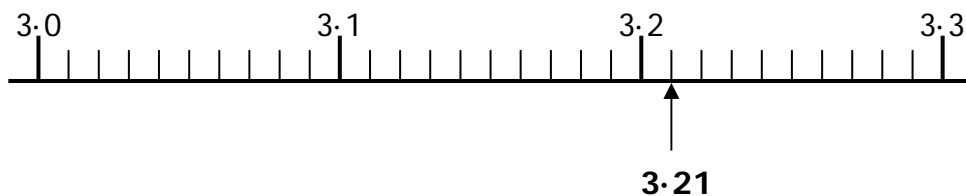
Item	Price	Total Cost
5 bags of crisps	15 cents each bag	
2 rolls of sweets	6 cents each roll	
8 packets of mints	11 cents each packet	
<b>Grand Total</b>		<b>Lm     .     _____</b>

(b) Jonathan pays with a **Lm5 note**.  
What change does he receive?

Lm \_\_\_\_\_ . \_\_\_\_\_

(5 Marks)

3. Look at this number line:



(a) Put these numbers in their **correct place** on the number line.  
The first one is done for you.

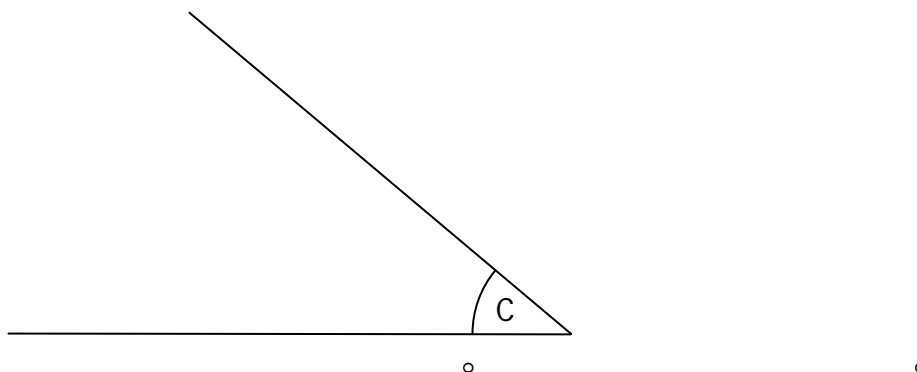
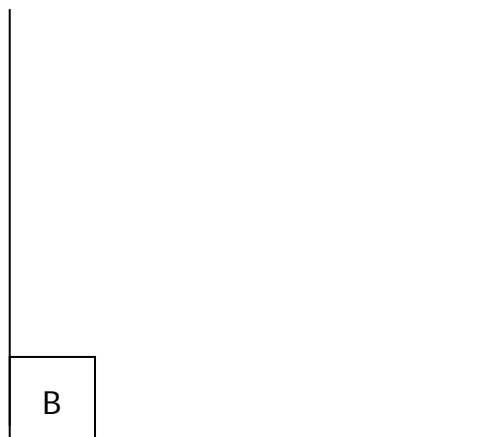
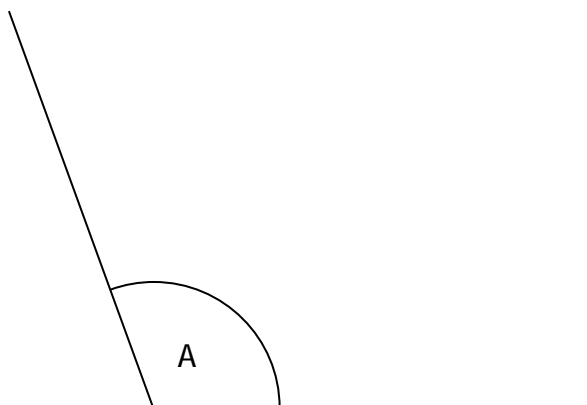
**3.21, 3.06, 3.29, 3.1, 3.02, 3.17**

(b) Write down these 6 numbers in order, **smallest first**.

\_\_\_\_\_

(4 Marks)

4. (a) **Measure** these angles using a protractor.



Angle A = \_\_\_\_\_      Angle B = \_\_\_\_\_      Angle C = \_\_\_\_\_

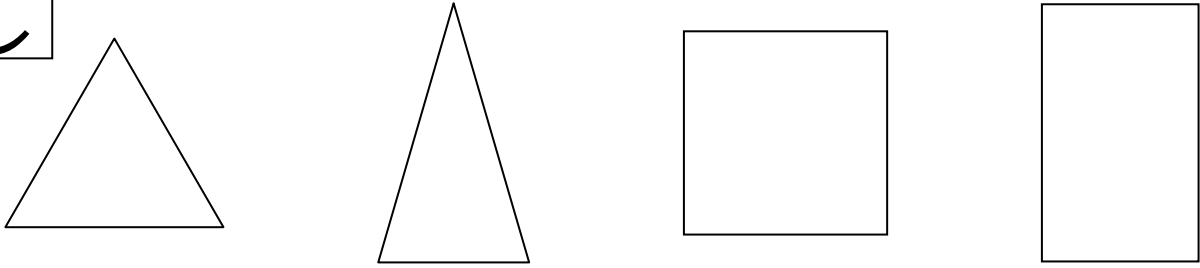
(b) Use the words **a right angle, an acute angle, an obtuse angle, a reflex angle** to complete:

Angle A is \_\_\_\_\_      Angle B is \_\_\_\_\_

(5 Marks)

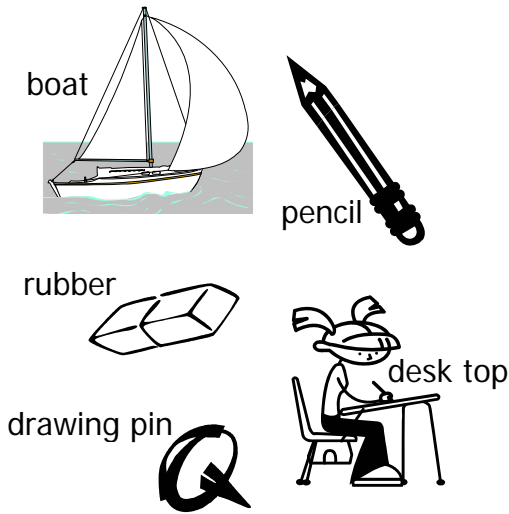
**C**

5. Draw **all** the lines of **symmetry**.



(4 Marks)

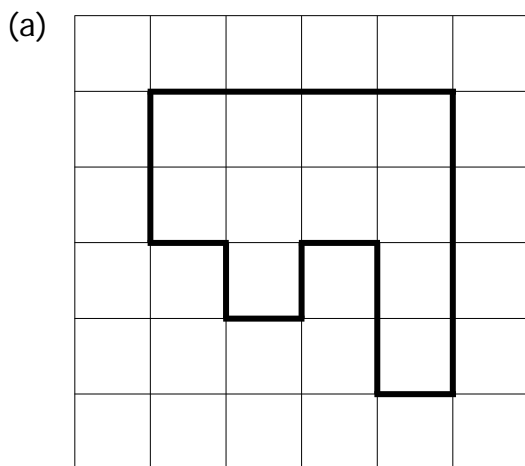
6. **Match** each object to its length.



Object	Length
	6 m
	40 mm
	18 cm
	10 mm
	60 cm

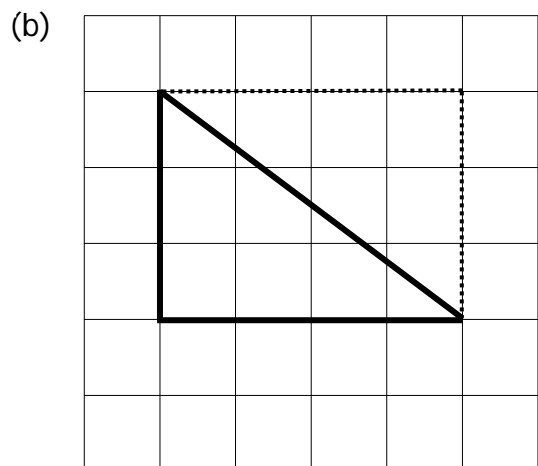
(5 Marks)

7. On the grid, each side of a square represents 1 cm.



Find the **perimeter** of the shape.

Perimeter = \_\_\_\_\_ cm



Find the **area** of the triangle.


Area = \_\_\_\_\_ cm<sup>2</sup>

(5 Marks)

8. (a) Round 274 to the nearest 10. \_\_\_\_\_
- (b) Round Lm36.57 to the nearest Maltese Lira. Lm\_\_\_\_\_
- (c) A pencil is 12.8 cm long. Round this length to the nearest cm. \_\_\_\_\_ cm
- (d) There are 2735 people. Round this number to the nearest 100. \_\_\_\_\_ people
- 
- (4 Marks)

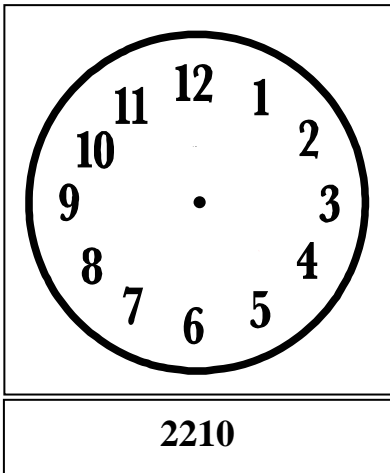
9. **Draw** the hands of the clock to show the time.

(a)



0615

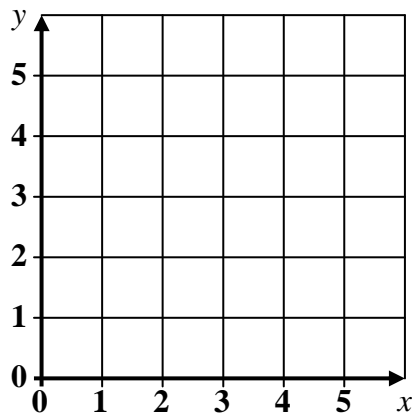
(b)



2210

(4 Marks)

10. (a) **Plot** the following points and **join** them up:  
**(2, 1) → (2, 3) → (1, 3) → (3, 5) → (5, 3) → (4, 3) → (4, 1) → (2, 1)**



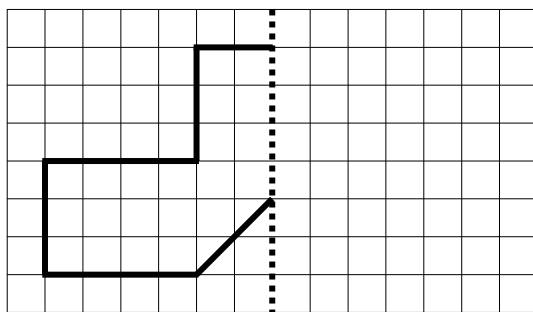
(b) What shape have you drawn?

\_\_\_\_\_

(5 Marks)

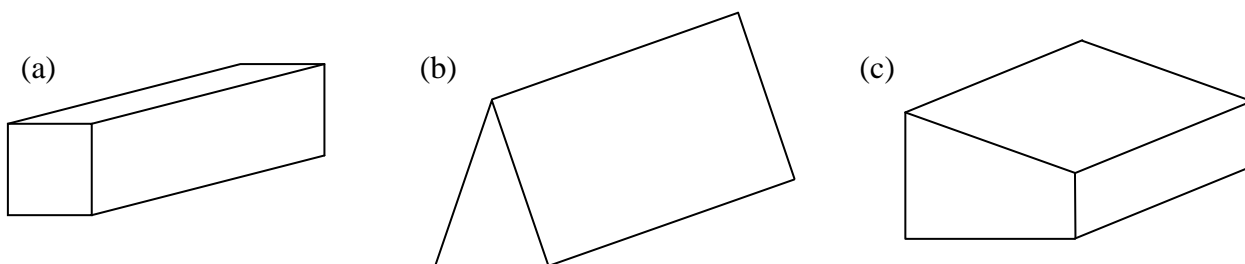


11. Complete the symmetrical shape. The dotted line is the line of symmetry.



(5 Marks)

12. Complete the table. The first one is done for you.



	Shape	Number of faces	Number of vertices	Number of edges
(a)	Cuboid	6	8	12
(b)	Triangular Prism			
(c)	Prism			

(6 Marks)

13. (a) Write these numbers in order, **smallest** first.

3, 4, 7, 10, 2, 3, 7, 3, 6

\_\_\_\_\_

Use the above numbers to find:

(b) the **mode** of this set of numbers.

\_\_\_\_\_

(c) the **mean** of this set of numbers.

\_\_\_\_\_

(5 Marks)

**End of Paper**