

Part I

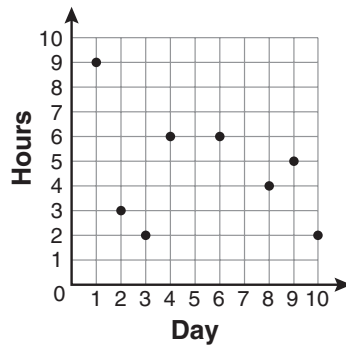
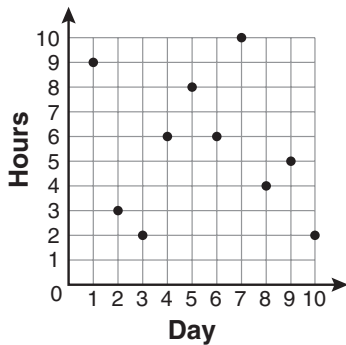
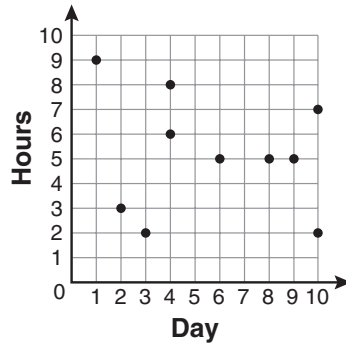
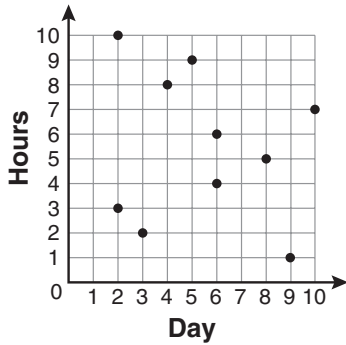
Answer all questions in this part. Each correct answer will receive 2 credits. No partial credit will be allowed. For each question, write on the separate answer sheet the numeral preceding the word or expression that best completes the statement or answers the question. [60]

Use this space for
computations.

- 1 For 10 days, Romero kept a record of the number of hours he spent listening to music. The information is shown in the table below.

Day	1	2	3	4	5	6	7	8	9	10
Hours	9	3	2	6	8	6	10	4	5	2

Which scatter plot shows Romero's data graphically?



Use this space for computations.

2 Throughout history, many people have contributed to the development of mathematics. These mathematicians include Pythagoras, Euclid, Hypatia, Euler, Einstein, Agnesi, Fibonacci, and Pascal. What is the probability that a mathematician's name selected at random from those listed will start with either the letter *E* or the letter *A*?

(1) $\frac{2}{8}$

(3) $\frac{4}{8}$

(2) $\frac{3}{8}$

(4) $\frac{6}{8}$

3 Which expression represents $\frac{(2x^3)(8x^5)}{4x^6}$ in simplest form?

(1) x^2

(3) $4x^2$

(2) x^9

(4) $4x^9$

4 Which interval notation represents the set of all numbers from 2 through 7, inclusive?

(1) $(2,7]$

(3) $[2,7)$

(2) $(2,7)$

(4) $[2,7]$

5 Which property is illustrated by the equation $ax + ay = a(x + y)$?

(1) associative

(3) distributive

(2) commutative

(4) identity

Use this space for computations.

6 The expression $x^2 - 16$ is equivalent to

- (1) $(x + 2)(x - 8)$ (3) $(x + 4)(x - 4)$
(2) $(x - 2)(x + 8)$ (4) $(x + 8)(x - 8)$

7 Which situation describes a correlation that is *not* a causal relationship?

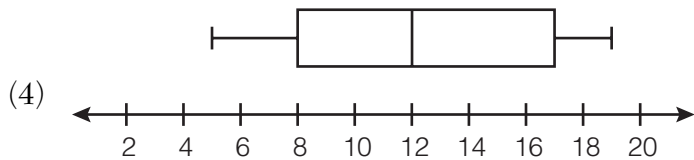
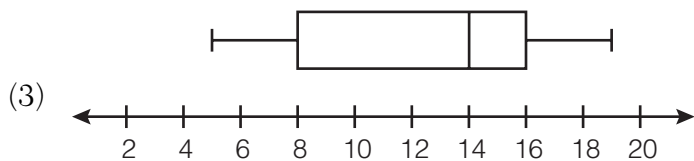
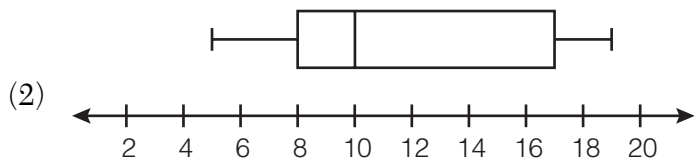
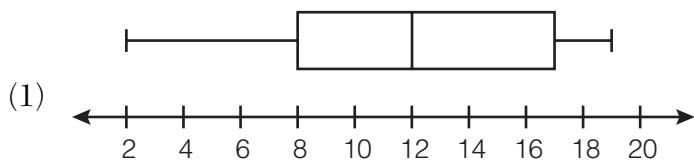
- (1) The rooster crows, and the Sun rises.
(2) The more miles driven, the more gasoline needed.
(3) The more powerful the microwave, the faster the food cooks.
(4) The faster the pace of a runner, the quicker the runner finishes.

8 The equations $5x + 2y = 48$ and $3x + 2y = 32$ represent the money collected from school concert ticket sales during two class periods. If x represents the cost for each adult ticket and y represents the cost for each student ticket, what is the cost for each adult ticket?

- (1) \$20 (3) \$8
(2) \$10 (4) \$4

Use this space for computations.

9 The data set 5, 6, 7, 8, 9, 9, 9, 10, 12, 14, 17, 17, 18, 19, 19 represents the number of hours spent on the Internet in a week by students in a mathematics class. Which box-and-whisker plot represents the data?



10 Given:

$$\text{Set } A = \{(-2,-1), (-1,0), (1,8)\}$$

$$\text{Set } B = \{(-3,-4), (-2,-1), (-1,2), (1,8)\}.$$

What is the intersection of sets A and B ?

(1) $\{(1,8)\}$

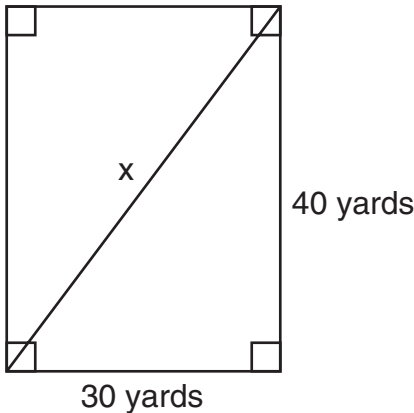
(2) $\{(-2,-1)\}$

(3) $\{(-2,-1), (1,8)\}$

(4) $\{(-3,-4), (-2,-1), (-1,2), (-1,0), (1,8)\}$

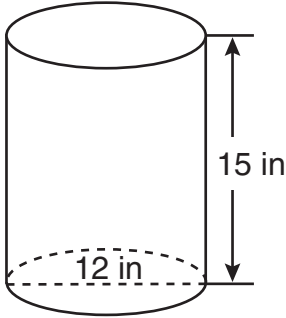
**Use this space for
computations.**

- 11** Tanya runs diagonally across a rectangular field that has a length of 40 yards and a width of 30 yards, as shown in the diagram below.



What is the length of the diagonal, in yards, that Tanya runs?

- (1) 50
 - (2) 60
 - (3) 70
 - (4) 80
- 12** A cylindrical container has a diameter of 12 inches and a height of 15 inches, as illustrated in the diagram below.



(Not drawn to scale)

What is the volume of this container to the *nearest tenth* of a cubic inch?

- (1) 6,785.8
- (2) 4,241.2
- (3) 2,160.0
- (4) 1,696.5

**Use this space for
computations.**

13 What is an equation for the line that passes through the coordinates (2,0) and (0,3)?

(1) $y = -\frac{3}{2}x + 3$

(3) $y = -\frac{2}{3}x + 2$

(2) $y = -\frac{3}{2}x - 3$

(4) $y = -\frac{2}{3}x - 2$

14 Which situation should be analyzed using bivariate data?

- (1) Ms. Saleem keeps a list of the amount of time her daughter spends on her social studies homework.
- (2) Mr. Benjamin tries to see if his students' shoe sizes are directly related to their heights.
- (3) Mr. DeStefan records his customers' best video game scores during the summer.
- (4) Mr. Chan keeps track of his daughter's algebra grades for the quarter.

15 An electronics store sells DVD players and cordless telephones. The store makes a \$75 profit on the sale of each DVD player (d) and a \$30 profit on the sale of each cordless telephone (c). The store wants to make a profit of at least \$255.00 from its sales of DVD players and cordless phones. Which inequality describes this situation?

(1) $75d + 30c < 255$

(3) $75d + 30c > 255$

(2) $75d + 30c \leq 255$

(4) $75d + 30c \geq 255$

Use this space for computations.

16 What is the slope of the line containing the points (3,4) and (-6,10)?

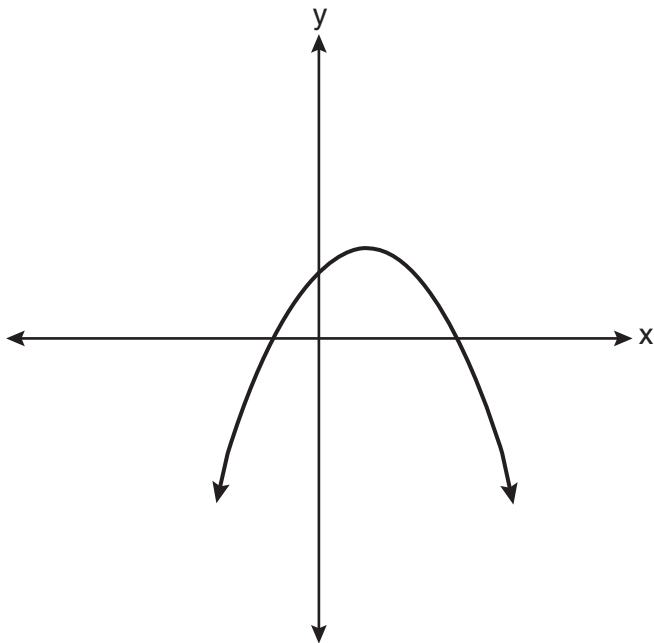
(1) $\frac{1}{2}$

(3) $-\frac{2}{3}$

(2) 2

(4) $-\frac{3}{2}$

17 Which type of graph is shown in the diagram below?



(1) absolute value

(3) linear

(2) exponential

(4) quadratic

**Use this space for
computations.**

18 The expression $\frac{9x^4 - 27x^6}{3x^3}$ is equivalent to

(1) $3x(1 - 3x)$

(3) $3x(1 - 9x^5)$

(2) $3x(1 - 3x^2)$

(4) $9x^3(1 - x)$

19 Daniel's Print Shop purchased a new printer for \$35,000. Each year it depreciates (loses value) at a rate of 5%. What will its approximate value be at the end of the fourth year?

(1) \$33,250.00

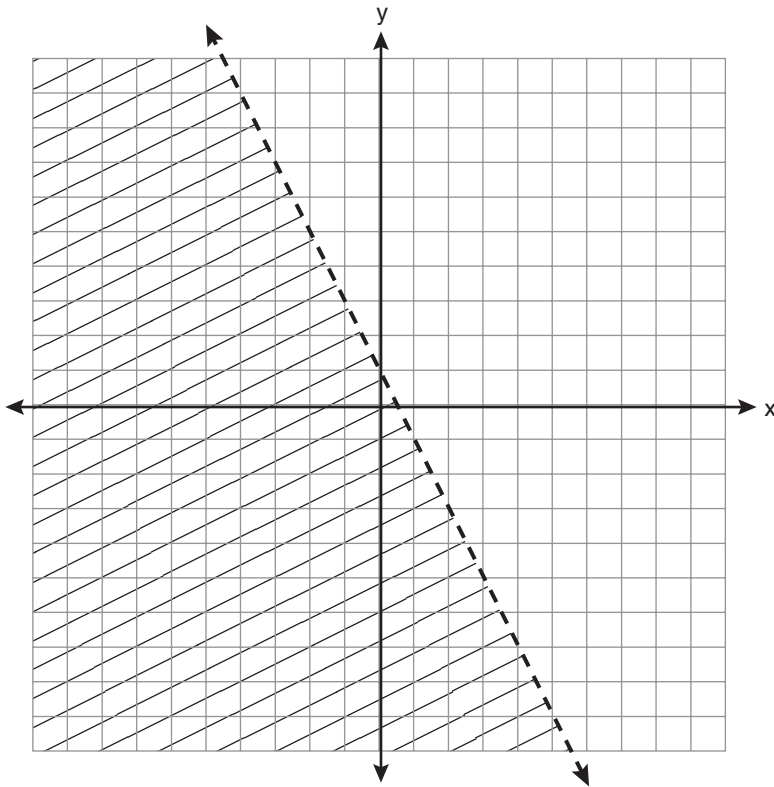
(3) \$28,507.72

(2) \$30,008.13

(4) \$27,082.33

Use this space for
computations.

20 Which inequality is represented by the graph below?



(1) $y < 2x + 1$

(3) $y < \frac{1}{2}x + 1$

(2) $y < -2x + 1$

(4) $y < -\frac{1}{2}x + 1$

21 In triangle MCT , the measure of $\angle T = 90^\circ$, $MC = 85$ cm, $CT = 84$ cm, and $TM = 13$ cm. Which ratio represents the sine of $\angle C$?

(1) $\frac{13}{85}$

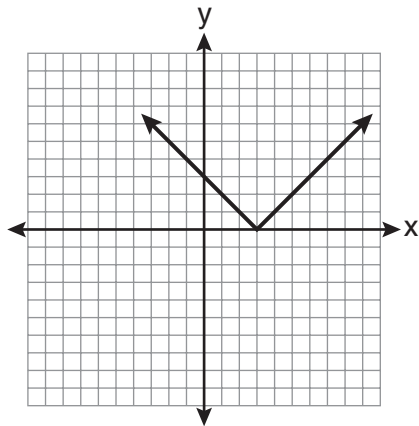
(3) $\frac{13}{84}$

(2) $\frac{84}{85}$

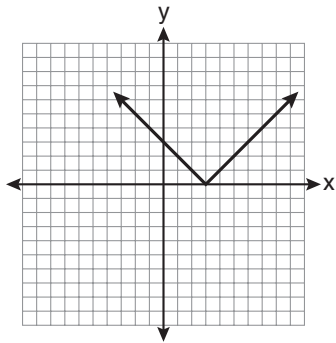
(4) $\frac{84}{13}$

22 The diagram below shows the graph of $y = |x - 3|$.

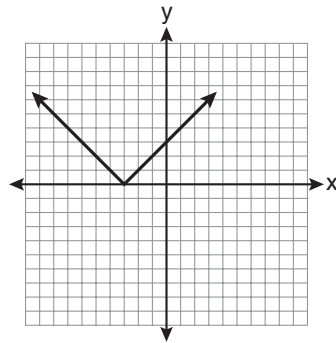
Use this space for computations.



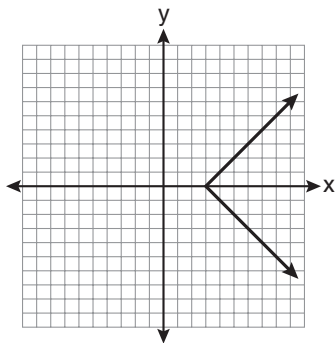
Which diagram shows the graph of $y = -|x - 3|$?



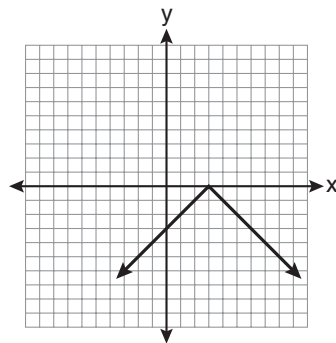
(1)



(3)



(2)



(4)

Use this space for computations.

23 The groundskeeper is replacing the turf on a football field. His measurements of the field are 130 yards by 60 yards. The actual measurements are 120 yards by 54 yards. Which expression represents the relative error in the measurement?

(1) $\frac{(130)(60) - (120)(54)}{(120)(54)}$

(3) $\frac{(130)(60) - (120)(54)}{(130)(60)}$

(2) $\frac{(120)(54)}{(130)(60) - (120)(54)}$

(4) $\frac{(130)(60)}{(130)(60) - (120)(54)}$

24 Which value of x is in the solution set of the inequality $-2x + 5 > 17$?

(1) -8

(3) -4

(2) -6

(4) 12

25 What is the quotient of 8.05×10^6 and 3.5×10^2 ?

(1) 2.3×10^3

(3) 2.3×10^8

(2) 2.3×10^4

(4) 2.3×10^{12}

26 The length of a rectangular window is 5 feet more than its width, w . The area of the window is 36 square feet. Which equation could be used to find the dimensions of the window?

(1) $w^2 + 5w + 36 = 0$

(3) $w^2 - 5w + 36 = 0$

(2) $w^2 - 5w - 36 = 0$

(4) $w^2 + 5w - 36 = 0$

**Use this space for
computations.**

27 What is the sum of $\frac{d}{2}$ and $\frac{2d}{3}$ expressed in simplest form?

(1) $\frac{3d}{5}$

(3) $\frac{7d}{5}$

(2) $\frac{3d}{6}$

(4) $\frac{7d}{6}$

28 For which value of x is $\frac{x-3}{x^2-4}$ undefined?

(1) -2

(3) 3

(2) 0

(4) 4

29 Which verbal expression represents $2(n-6)$?

(1) two times n minus six

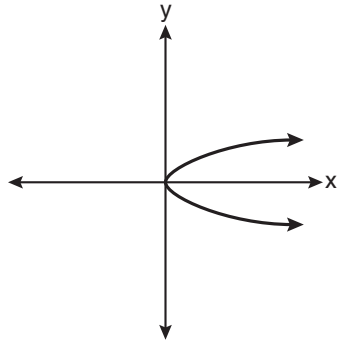
(2) two times six minus n

(3) two times the quantity n less than six

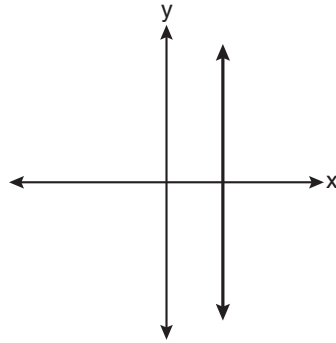
(4) two times the quantity six less than n

30 Which graph represents a function?

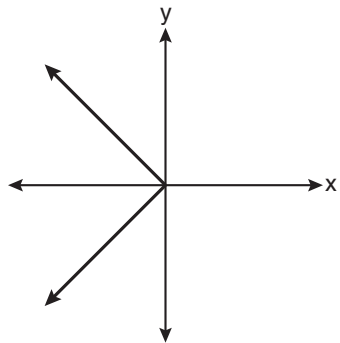
Use this space for computations.



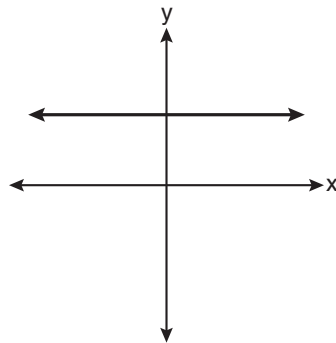
(1)



(3)



(2)



(4)

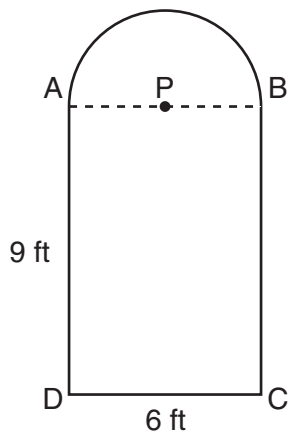
Part II

Answer all questions in this part. Each correct answer will receive 2 credits. Clearly indicate the necessary steps, including appropriate formula substitutions, diagrams, graphs, charts, etc. For all questions in this part, a correct numerical answer with no work shown will receive only 1 credit. [6]

31 Express $5\sqrt{72}$ in simplest radical form.

32 Solve for g : $3 + 2g = 5g - 9$

- 33** Serena's garden is a rectangle joined with a semicircle, as shown in the diagram below. Line segment AB is the diameter of semicircle P . Serena wants to put a fence around her garden.



Calculate the length of fence Serena needs to the *nearest tenth of a foot*.

Part III

Answer all questions in this part. Each correct answer will receive 3 credits. Clearly indicate the necessary steps, including appropriate formula substitutions, diagrams, graphs, charts, etc. For all questions in this part, a correct numerical answer with no work shown will receive only 1 credit. [9]

34 Hannah took a trip to visit her cousin. She drove 120 miles to reach her cousin's house and the same distance back home.

It took her 1.2 hours to get halfway to her cousin's house. What was her average speed, in miles per hour, for the first 1.2 hours of the trip?

Hannah's average speed for the remainder of the trip to her cousin's house was 40 miles per hour. How long, in hours, did it take her to drive the remaining distance?

Traveling home along the same route, Hannah drove at an average rate of 55 miles per hour. After 2 hours her car broke down. How many miles was she from home?

35 A prom ticket at Smith High School is \$120. Tom is going to save money for the ticket by walking his neighbor's dog for \$15 per week. If Tom already has saved \$22, what is the minimum number of weeks Tom must walk the dog to earn enough to pay for the prom ticket?

36 Mr. Laub has three children: two girls (Sue and Karen) and one boy (David). After each meal, one child is chosen at random to wash dishes.

If the same child can be chosen for both lunch and dinner, construct a tree diagram or list a sample space of all the possible outcomes of who will wash dishes after lunch and dinner on Saturday.

Determine the probability that one boy and one girl will wash dishes after lunch and dinner on Saturday.

Part IV

Answer all questions in this part. Each correct answer will receive 4 credits. Clearly indicate the necessary steps, including appropriate formula substitutions, diagrams, graphs, charts, etc. For all questions in this part, a correct numerical answer with no work shown will receive only 1 credit. [12]

37 The values of 11 houses on Washington St. are shown in the table below.

Value per House	Number of Houses
\$100,000	1
\$175,000	5
\$200,000	4
\$700,000	1

Find the mean value of these houses in dollars.

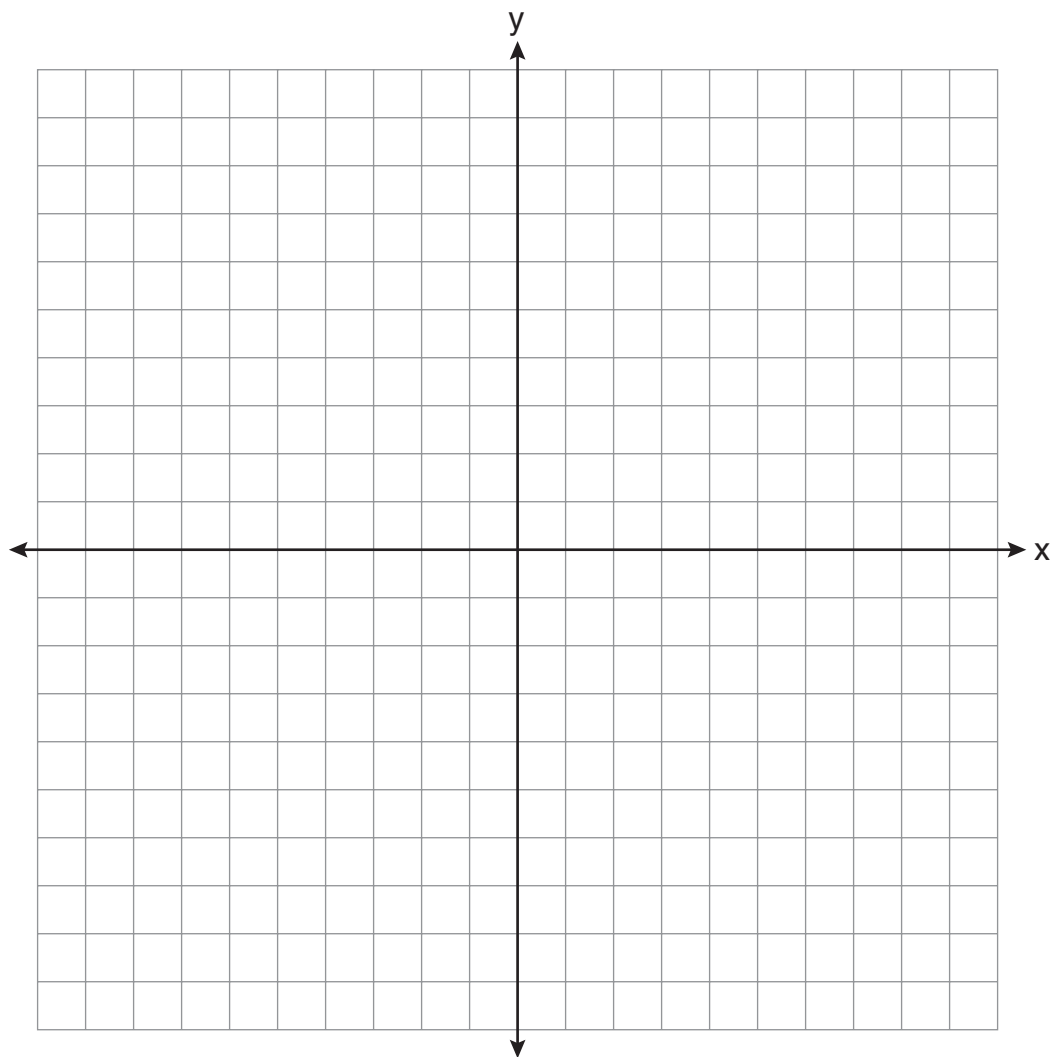
Find the median value of these houses in dollars.

State which measure of central tendency, the mean or the median, *best* represents the values of these 11 houses. Justify your answer.

38 Solve the following systems of equations graphically, on the set of axes below, and state the coordinates of the point(s) in the solution set.

$$y = x^2 - 6x + 5$$

$$2x + y = 5$$



39 Solve for x : $\frac{x + 1}{x} = \frac{-7}{x - 12}$