

Centre Number						Candidate Number				
Surname										
Other Names										
Candidate Signature										

For Examiner's Use	
Examiner's Initials	
Pages	Mark
2–3	
4–5	
6–7	
8–9	
10–11	
12–13	
14–15	
16–17	
18–19	
20–21	
22–23	
24–25	
26–27	
TOTAL	



General Certificate of Secondary Education
Foundation Tier
June 2012

Mathematics (Linear)

43652F

Paper 2

Wednesday 13 June 2012 9.00 am to 10.45 am

F

For this paper you must have:

- a calculator
- mathematical instruments.



Time allowed

- 1 hour 45 minutes

Instructions

- Use black ink or black ball-point pen. Draw diagrams in pencil.
- Fill in the boxes at the top of this page.
- Answer **all** questions.
- You must answer the questions in the spaces provided. Do not write outside the box around each page or on blank pages.
- Do all rough work in this book.

Information

- The marks for questions are shown in brackets.
- The maximum mark for this paper is 105.
- The quality of your written communication is specifically assessed in Questions 21, 22 and 23. These questions are indicated with an asterisk (*).
- You may ask for more answer paper, tracing paper and graph paper. These must be tagged securely to this answer book.

Advice

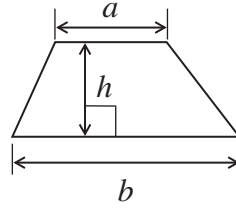
- In all calculations, show clearly how you work out your answer.



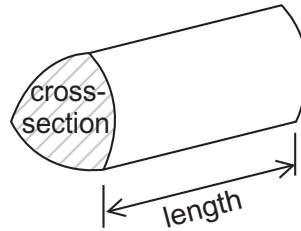
J U N 1 2 4 3 6 5 2 F 0 1

Formulae Sheet: Foundation Tier

Area of trapezium = $\frac{1}{2}(a+b)h$




Volume of prism = area of cross-section \times length



Answer **all** questions in the spaces provided.

1 The pictogram shows what people did when they went to a gym.



Key  represents people

1 (a) 20 people did Dancing.

Complete the key for the pictogram.

(1 mark)

1 (b) Altogether, how many people went to the gym?

.....
.....

Answer (3 marks)



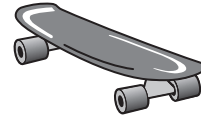
2 Here are three items in a sports shop.



Football
£12



Dartboard
£9.99



Skateboard

2 (a) Matt bought a football and two dartboards.

Work out the total cost.

.....
.....

Answer £ (2 marks)

2 (b) Sarah bought a skateboard and a football.
She paid with a £50 note.

Her change was £14.50

Work out the cost of the skateboard.

.....
.....
.....
.....

Answer £ (3 marks)



2 (c) Sarah only has the £14.50 change.

She sees this offer.



Can she afford to buy two pizzas?
You **must** show your working.

.....

.....

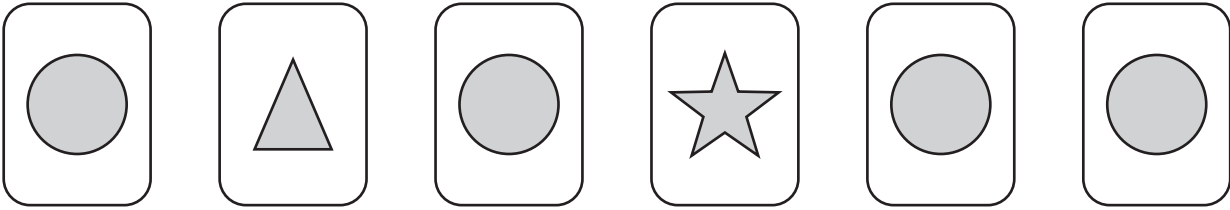
.....

(2 marks)

Turn over for the next question



3 Here are some cards.



Here is a list of words that describe chance.

impossible unlikely likely certain

A card is picked at random.

Complete each sentence using **one** word from the list.

It is that the card will have a circle on it.

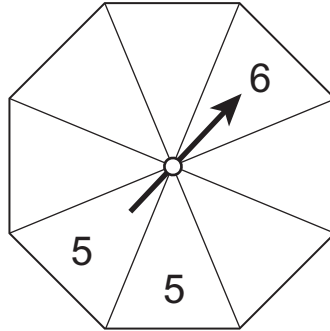
It is that the card will have a number on it.

It is that the card will have a triangle on it.

(3 marks)



- 4 Here is a fair spinner with equal-sized sections.



Fill in the missing numbers on the spinner so that
the arrow is equally likely to land on 4 or 5
and the arrow is more likely to land on 3 than 6
and the total of all sections is 32.

(3 marks)

Turn over for the next question

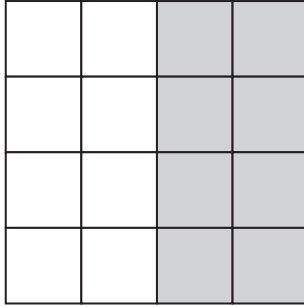
Turn over ►



- 5** Use your calculator to work out 13×24^2

Answer (1 mark)

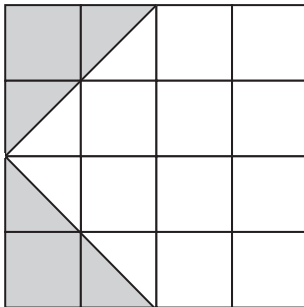
- 6 (a)** Here is a square grid.



What percentage of the grid is shaded?

Answer % (1 mark)

- 6 (b)** Here is another square grid.



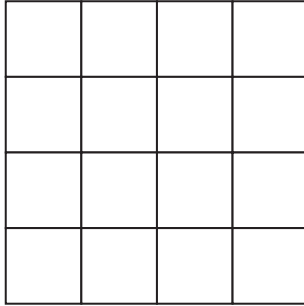
What fraction of the grid is shaded?
Give your answer in its simplest form.

.....

Answer (2 marks)



6 (c) Shade $\frac{1}{8}$ of this square grid.



(1 mark)

Turn over for the next question



7 Here is a sign in a car park.



7 (a) Lucy paid £2.85 to park.
How many hours did she pay for?

.....

Answer hours (2 marks)

7 (b) Lucy paid exactly £2.85
She used **six** coins.
She did **not** use any £1 coins.
Show **three** different ways she could have paid.

.....
.....
.....

Answer 1,,,,,

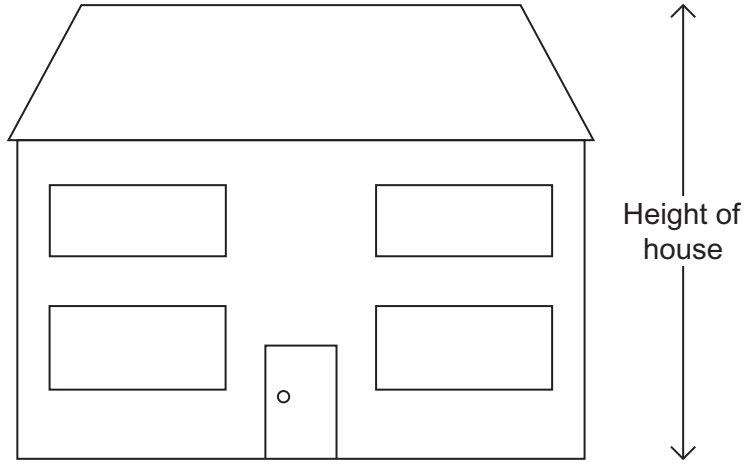
Answer 2,,,,,

Answer 3,,,,,

(3 marks)



8 Here is a scale drawing of the front of a house.



The actual height of the door is 2 metres.

Work out the actual height of the house.

.....

.....

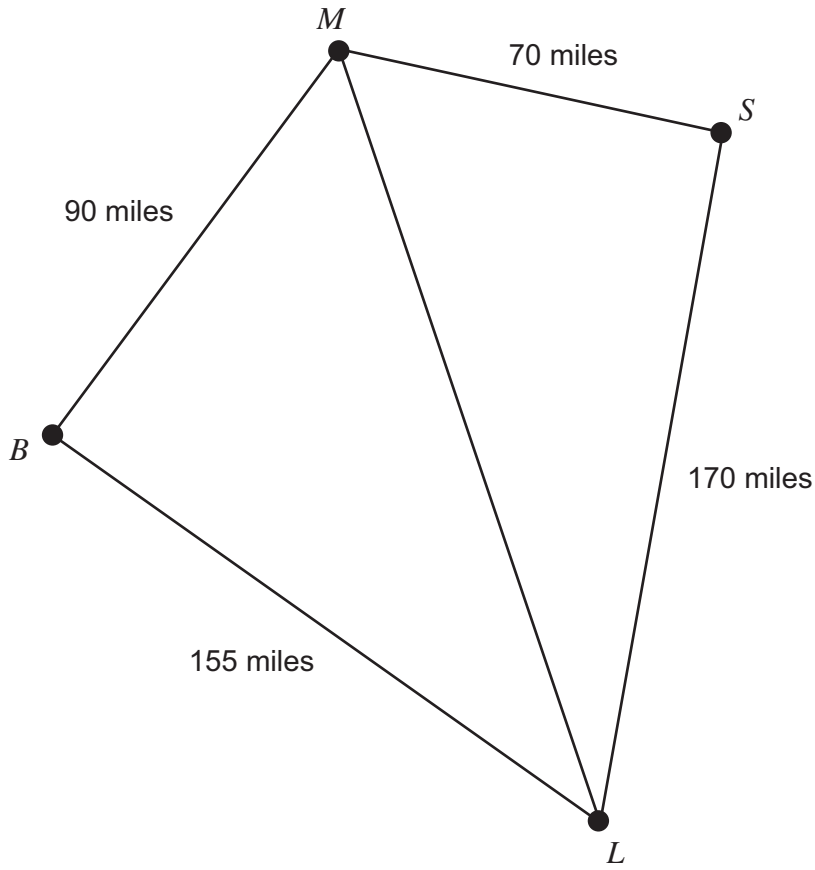
.....

Answer metres (3 marks)

Turn over for the next question



9 The diagram shows distances between some towns.



Not drawn
accurately

9 (a) A van travels from *M* to *S* and then from *S* to *L*.

Work out the total distance the van travels.

.....

Answer miles (1 mark)

9 (b) The **direct** distance from *M* to *L* is three times the distance from *M* to *S*.

How much further does the van travel by **not** going directly from *M* to *L*?

.....

.....

.....

Answer miles (3 marks)



9 (c) Chris is going from *M* to *B*.
He travels 80% of the distance when his car breaks down.
A breakdown truck is halfway between *M* and *B*.

How far does the truck have to travel to reach Chris?

.....
.....
.....

Answer miles (4 marks)

10 Use your calculator to work out $\sqrt{2201}$

10 (a) Write down your full calculator display.

Answer (1 mark)

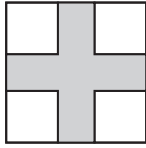
10 (b) Give your answer to the nearest 10.

Answer (1 mark)

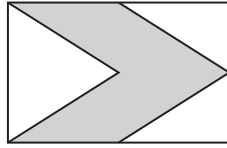
Turn over for the next question



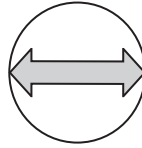
11 Here are four diagrams.



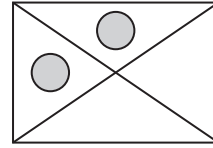
A



B



C



D

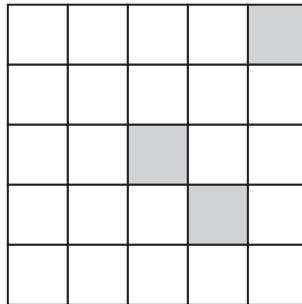
11 (a) Which **two** diagrams have more than one line of symmetry?

Answer and (2 marks)

11 (b) Which diagram has rotational symmetry of order 2?

Answer (1 mark)

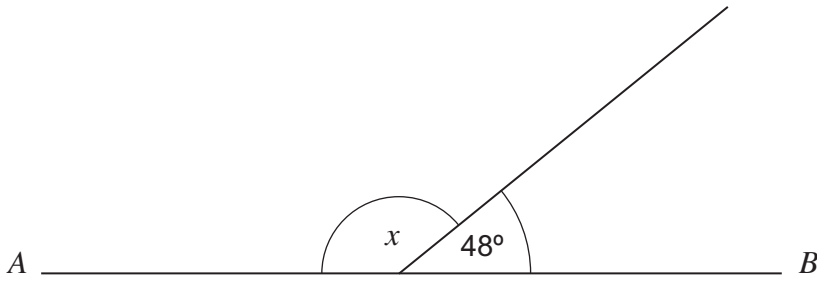
11 (c) Here is a square grid.



Shade **two** more squares to make this grid have rotational symmetry of order 2. (1 mark)



12 (a) *AB* is a straight line.



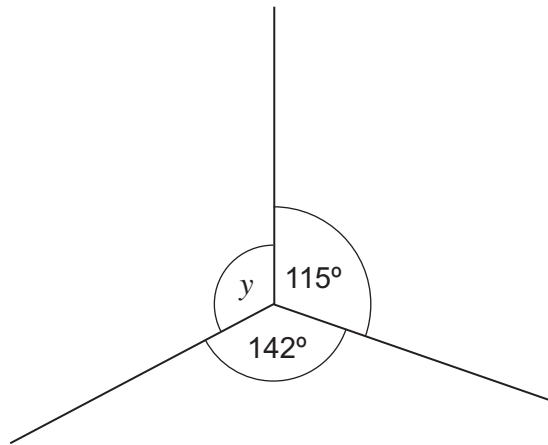
Not drawn
accurately

Work out the value of x .

.....

Answer degrees (1 mark)

12 (b) The diagram shows three angles at a point.



Not drawn
accurately

Work out the value of y .

.....

.....

Answer degrees (2 marks)

7

Turn over ►



13 Circle the most suitable measurement for each of the following.

The amount an apple weighs.

1 gram 10 grams 100 grams

The amount of water in a full kettle.

2 litres 20 litres 200 litres

The height of a bus.

5 metres 50 metres 500 metres

(3 marks)

14 (a) Solve $3w = 18$

.....

$w =$ (1 mark)

14 (b) Solve $\frac{x}{4} = 15$

.....

$x =$ (1 mark)

14 (c) Solve $2y - 5 = 12$

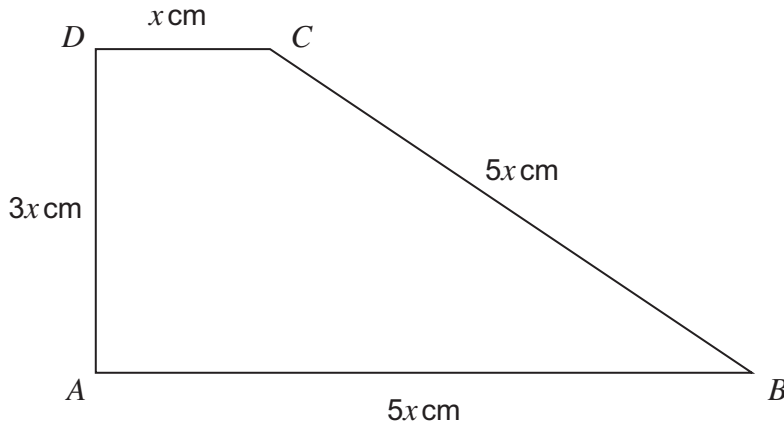
.....

.....

$y =$ (2 marks)



15 The diagram shows a trapezium.



Not drawn
accurately

15 (a) Write down the length of AB when $x = 6.2$

.....

Answer cm (2 marks)

15 (b) Work out the perimeter when $x = 7$

.....

.....

Answer cm (3 marks)

Turn over for the next question



16 A group of 15 footballers ran a race.
The stem-and-leaf diagram shows their times.

Key 6|5 represents 6.5 seconds



16 (a) How many took less than 7.5 seconds?

Answer (1 mark)

16 (b) Work out the median.

.....

Answer seconds (1 mark)

16 (c) Work out the range.

.....

Answer seconds (1 mark)



16 (d) A group of athletes ran the same race.
The table shows information about their times.

Median (seconds)	Range (seconds)
7.1	1.5

Compare the times of the athletes and the footballers.

Comparison 1
.....
.....

Comparison 2
.....
.....

(2 marks)

17 Andy thinks of a number.

He multiplies it by 4
He then subtracts 6
His answer is 7.2

What number did he think of?

.....
.....
.....


Answer (3 marks)

8

Turn over ►



18 The diagram shows a door lock.



The code is a number followed by a letter.
Steve enters a code at random.

Work out the probability that he has entered the correct code.

.....
.....
.....

Answer (3 marks)

19 Ellie drives 169 miles from Sheffield to London.

She drives at an average speed of 65 miles per hour.
She leaves Sheffield at 6:30 am.

Does she arrive in London before 9:00 am?
You **must** show your working.

.....
.....
.....
.....

(4 marks)



20 (a) Ben sees these adverts to hire the same car.

Hire Deal

No charge for mileage

Normal price £78 each day

Offer Now $\frac{1}{3}$ off

Best Cars

£44 each day

15p for each mile

Ben wants to hire the car for 10 days.
He expects to drive 600 miles.

Should he choose Hire Deal or Best Cars to get the cheaper deal?
You **must** show your working.

.....

.....

.....

.....

.....

Answer (6 marks)

20 (b) Another company uses this formula to work out the cost of hiring a car.

$$C = 15(3n + 8)$$

C is the cost in pounds
 n is the number of days of hiring the car.

Becky hires a car for 13 days.

How much does she pay?

.....

.....

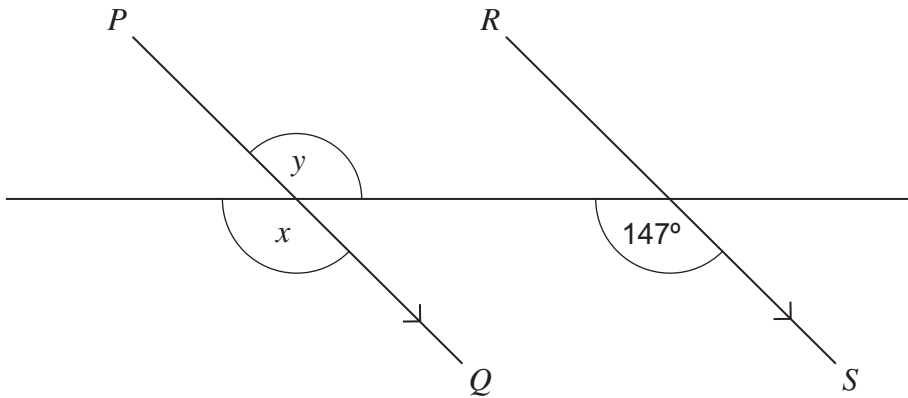
Answer £ (2 marks)

Turn over ►



***21** PQ and RS are parallel.

Not drawn
accurately



21 (a) Write down the value of x .
Give a reason for your answer.

Answerdegrees

Reason
(2 marks)

21 (b) Write down the value of y .
Give a reason for your answer.

Answerdegrees

Reason
(2 marks)



***22**

A school only has pupils in Year 7, Year 8 and Year 9.

The table shows information about pupil absence on one day.

	Year 7	Year 8	Year 9
Number of pupils in year group	380	400	420
Number of pupils absent	28	32	36

The target for daily attendance is 93% or more for the whole school.

Did the school meet the target that day?

.....

.....

.....

.....

.....

.....

.....

.....

(5 marks)

Turn over for the next question

Turn over ►



***23** Use trial and improvement to find a solution to the equation

$$x^3 - 3x = 45$$

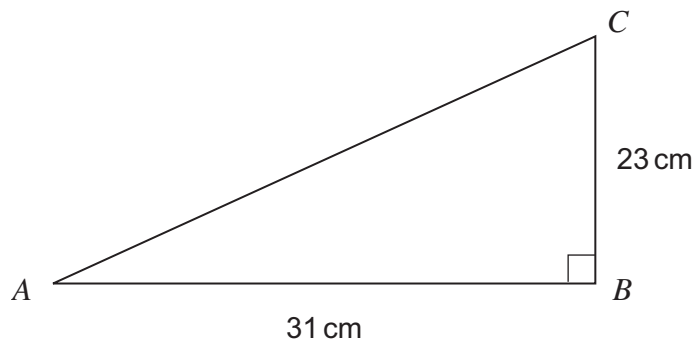
The first step is shown in the table.
Give your solution to 1 decimal place.

x	$x^3 - 3x$	Comment
3	18	Too small

$x =$ (4 marks)



24

Work out the length AC .Not drawn
accurately

.....

.....

.....

.....

Answer cm (3 marks)

Turn over for the next question

7

Turn over ►



25 A gym owner wants to know the number of hours that people exercise.

Write a question that he can use in his survey.
Include a response section.

.....
.....

(2 marks)

26 (a) Solve the inequality $3x - 5 \geq 16$

.....
.....

Answer (2 marks)

26 (b) The values $-1, 0, 1, 2$ and 3 satisfy **one** of the inequalities below.

Circle the correct inequality.

$-2 < 2y \leq 6$

$-2 \leq 2y \leq 6$

$-2 \leq 2y < 6$

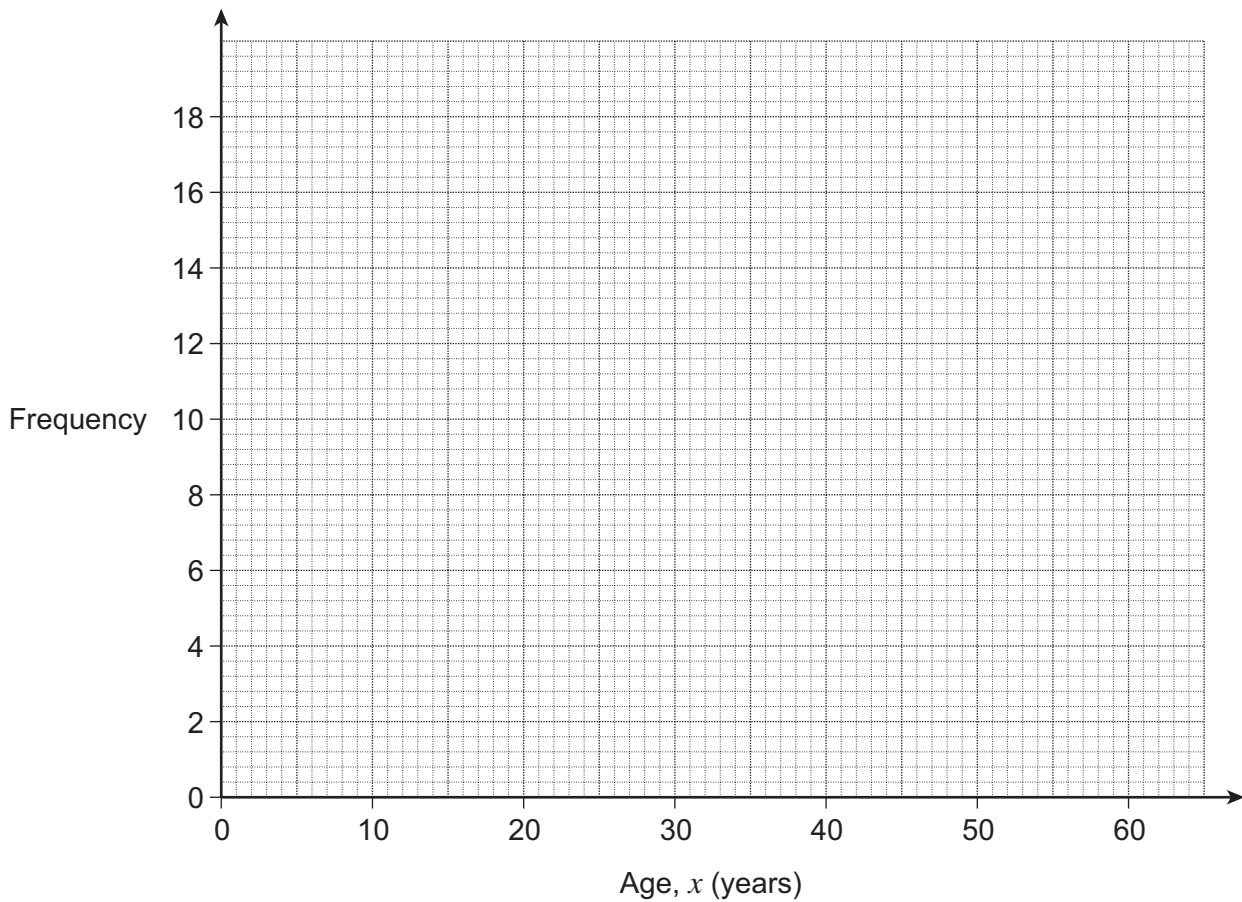
(1 mark)



27 The table shows information about the ages of people in a club.

Age, x (years)	$20 < x \leq 30$	$30 < x \leq 40$	$40 < x \leq 50$	$50 < x \leq 60$
Frequency	4	8	17	12

Draw a frequency polygon to represent the data.



(2 marks)

END OF QUESTIONS



There are no questions printed on this page

**DO NOT WRITE ON THIS PAGE
ANSWER IN THE SPACES PROVIDED**

