

Monday 11 June 2012 – Afternoon

GCSE MATHEMATICS B

J567/01 Paper 1 (Foundation Tier)

Candidates answer on the Question Paper.

OCR supplied materials:
None

Other materials required:

- Geometrical instruments
- Tracing paper (optional)

Duration: 1 hour 30 minutes



Candidate forename		Candidate surname	
--------------------	--	-------------------	--

Centre number										Candidate number				
---------------	--	--	--	--	--	--	--	--	--	------------------	--	--	--	--


INSTRUCTIONS TO CANDIDATES

- Write your name, centre number and candidate number in the boxes above. Please write clearly and in capital letters.
- Use black ink. HB pencil may be used for graphs and diagrams only.
- Answer **all** the questions.
- Read each question carefully. Make sure you know what you have to do before starting your answer.
- Your answers should be supported with appropriate working. Marks may be given for a correct method even if the answer is incorrect.
- Write your answer to each question in the space provided. Additional paper may be used if necessary but you must clearly show your candidate number, centre number and question number(s).
- Do **not** write in the bar codes.

INFORMATION FOR CANDIDATES

- The number of marks is given in brackets [] at the end of each question or part question.
- Your Quality of Written Communication is assessed in questions marked with an asterisk (*).
- The total number of marks for this paper is **100**.
- This document consists of **24** pages. Any blank pages are indicated.

WARNING



No calculator can be used for this paper

This paper has been pre modified for carrier language

Formulae Sheet: Foundation Tier

Area of trapezium = $\frac{1}{2} (a + b)h$



Volume of prism = (area of cross-section) \times length



PLEASE DO NOT WRITE ON THIS PAGE

1 Write the missing numbers in the boxes.

(a) $407 + 28 = \square$

[1]

(b) $\square \div 10 = 57$

[1]

(c) $3 \times \square = 72$

[1]

- 2 (a) This table shows the number of medals won by the top five countries in the 2008 Olympic Games.

	Gold	Silver	Bronze
USA	36	38	36
China	51	21	28
Russia	23	21	28
Great Britain	19	13	15
Australia	14	15	17

- (i) How many silver medals did China win?

(a)(i) _____ [1]

- (ii) How many medals did Great Britain win in total?

(ii) _____ [1]

- (iii) How many **more** gold medals did China win than Australia?

(iii) _____ [1]

- (b) Rebecca Adlington won the 400 metre swimming gold medal.
The swimming pool was 50 metres long.

How many lengths of the pool did Rebecca swim?

(b) _____ [2]

3 (a) Convert.

(i) 4.7 cm to millimetres

(a)(i) _____ mm [1]

(ii) 538 cm to metres

(ii) _____ m [1]

(b) Choose one of these metric units to complete each of the sentences below.

metres

litres

grams

centimetres

kilograms

millimetres

kilometres

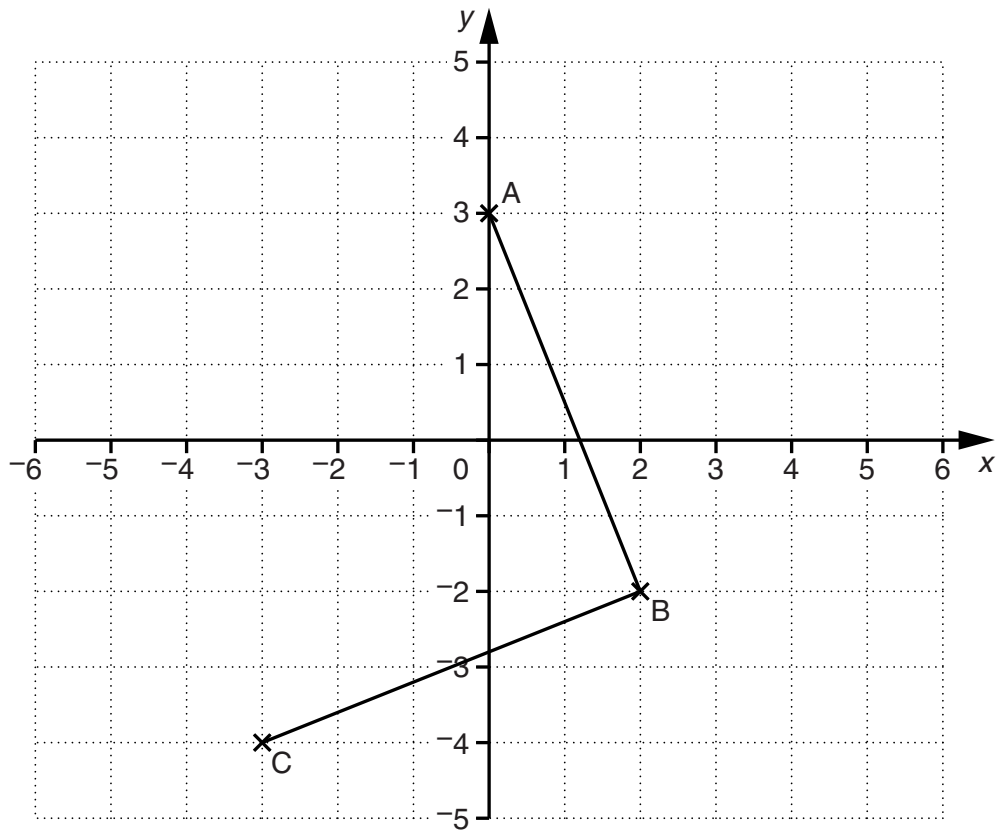
millilitres

(i) The length of a car is about 4.1 _____ . [1]

(ii) The petrol tank of a car holds about 55 _____ . [1]

(iii) The weight of a car is about 1200 _____ . [1]

4 Points A, B and C are marked on the grid below.



(a) Write down the coordinates of A, B, and C.

A (_____ , _____)

B (_____ , _____)

C (_____ , _____)

[3]

(b) Plot the point D so that ABCD is a square.

[1]

5 Work out.

(a) (i) $13.5 + 5.72$

(a)(i) _____ [1]

(ii) $3 - 1.4$

(ii) _____ [1]

(b) Write these decimals in order of size, smallest first.

0.4 0.59 0.16 0.05

(b) _____ [2]
smallest

6 (a) Work out.

(i) 10% of 320

(a)(i) _____ [1]

(ii) 40% of 320

(ii) _____ [1]

(iii) 5% of 320

(iii) _____ [1]

(b) There are 320 students in Year 10 in a school.
35% of these students come to school by bus.

How many students come to school by bus?

(b) _____ [2]

7 (a) Work out these calculations.

(i) $4 + 3 \times (1 + 2)$

(a)(i) _____ [1]

(ii) $\frac{4}{2} + 1 \times 3$

(ii) _____ [1]

(iii) $\frac{4 \times 3}{2 + 1}$

(iii) _____ [1]

(b) Fern is finding calculations that follow these rules

- you must use **all** the digits 1, 2, 3 and 4, but they can each be used only once
- you can add, subtract, multiply or divide as many times as you like
- you can use brackets.

For example when Fern was looking for a calculation with an **answer of 9**, she wrote down

$$(4 + 3 + 2) \times 1.$$

Find a calculation, using her rules, which has an answer of

(i) 8,

(b)(i) _____ [1]

(ii) 15.

(ii) _____ [1]

8 Josh and Sadiq are 400-metre runners. They complete a run each day for a week. They each keep a record of their times.

(a) These are Josh's times in seconds.

48.6 48.5 48.7 49.2 48.4 48.8 48.5

(i) Work out the median time.

(a)(i) _____ seconds [2]

(ii) Work out the range of Josh's times.

(ii) _____ seconds [1]

(b) Sadiq has a median of 47.7 seconds and a range of 1.2 seconds for his runs.

Make two comparisons between Josh's times and Sadiq's times.

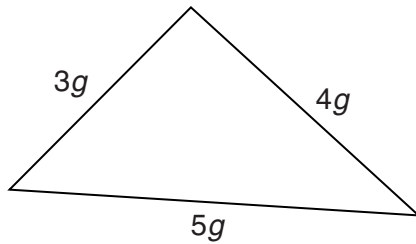
1 _____

2 _____

_____ [2]

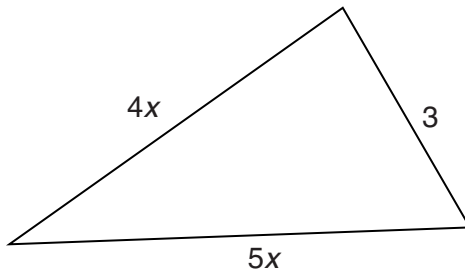
- 9 (a) Write down an expression for the perimeter of each triangle.
Write each answer as simply as possible.

(i)



(a)(i) _____ [1]

(ii)



(ii) _____ [1]

- (b) Simplify.

$$3c - d - 2c - 4d$$

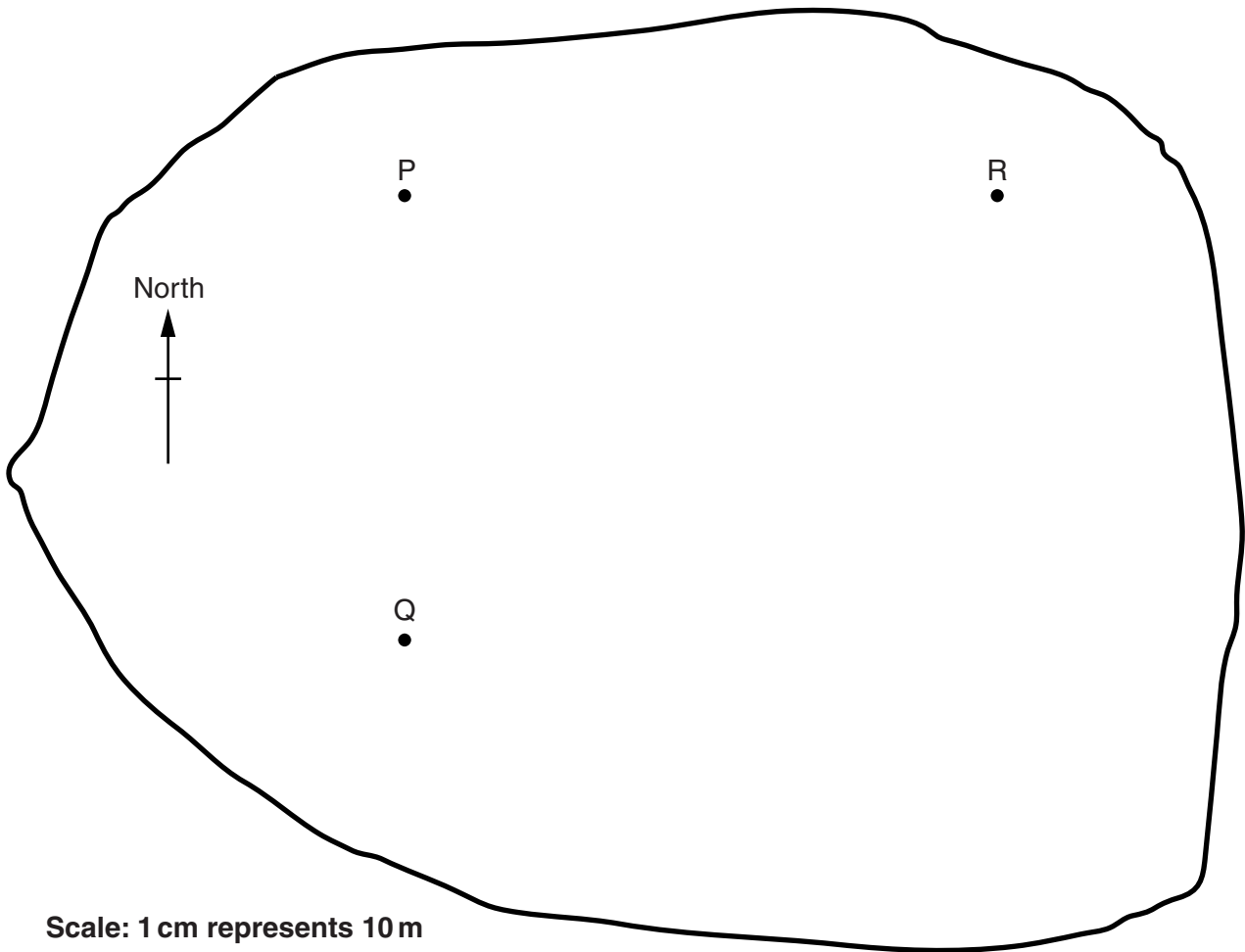
(b) _____ [2]

- (c) A regular pentagon has a perimeter of length $10y$.

What is the length of one side of the pentagon?

(c) _____ [2]

- 10 This is a scale drawing of part of a wind farm.
P, Q and R are wind turbines.
P is North of Q.



- (a) Use one of these words to complete the sentence.

North South East West

R is _____ of P. [1]

- (b) Use the map to complete these sentences.

(i) The distance from P to Q is _____ metres. [1]

(ii) The bearing of R from Q is _____°. [1]

- (c) A new wind turbine, T, is to be built.
The turbine will be 75 metres from Q on a bearing of 115° .

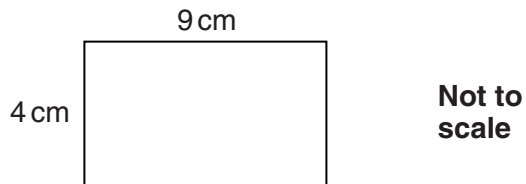
Mark the position of T with a cross on the scale drawing. [2]

- 11 (a) A square has a side of length 7 cm.

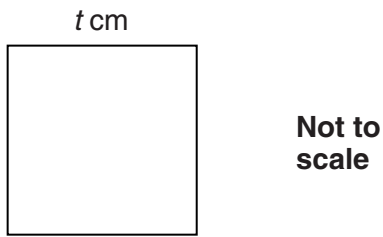
Work out the area of the square.

(a) _____ cm² [2]

- (b) A rectangle has width 4 cm and length 9 cm.



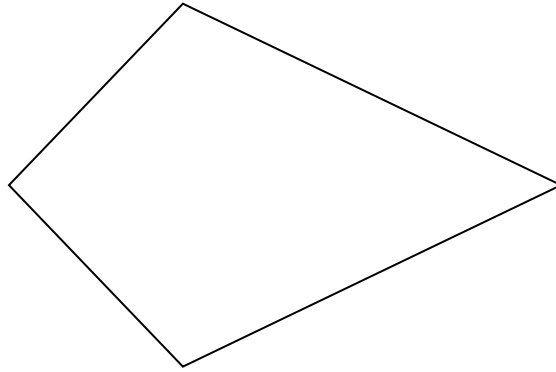
A square, of side t cm, has the same area as the rectangle.



Work out t .

(b) _____ [3]

- 12 (a) (i) Draw any lines of symmetry on this shape.



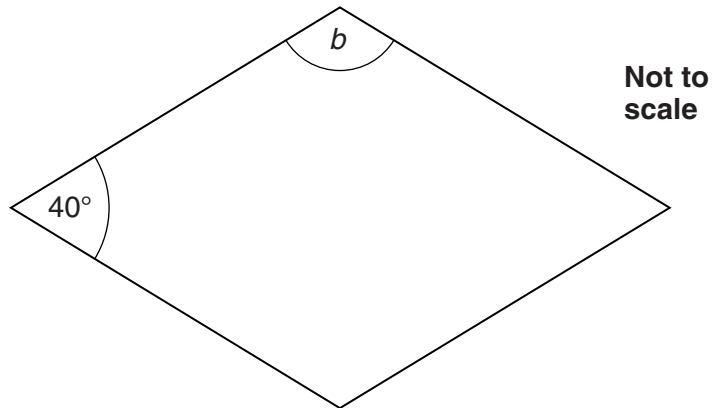
[1]

- (ii) What is the special mathematical name of the shape?
Choose from the words in this box.

Rectangle Parallelogram Trapezium Kite

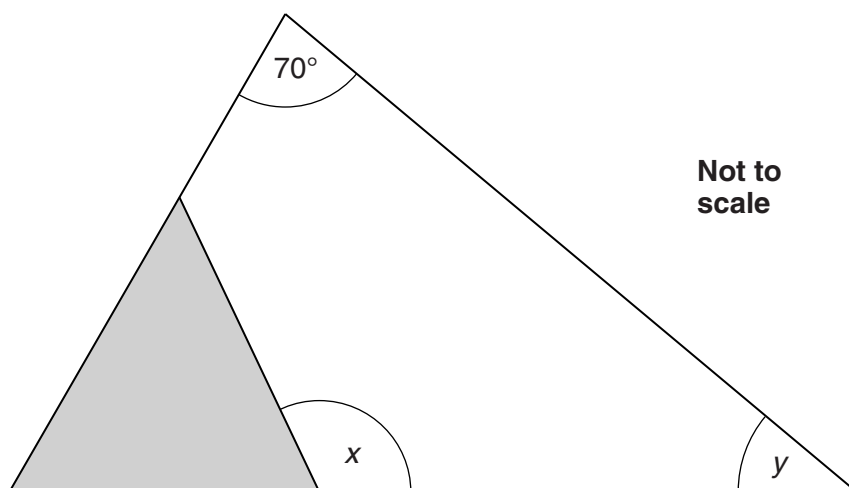
(a)(ii) _____ [1]

- (b) Work out angle b in this rhombus.



(b) _____ ° [3]

(c) Look at the diagram below.



The shaded triangle is equilateral.

(i) Work out angle x .

(c)(i) _____ $^\circ$ [2]

(ii) Work out angle y .

(ii) _____ $^\circ$ [2]

- 13 (a)** A box contains some counters.
5 are red, 4 are black and 2 are yellow.
George takes a counter from the box without looking.

(i) What is the probability that the counter is red?

(a)(i) _____ [2]

(ii) What is the probability that the counter is black **or** yellow?

(ii) _____ [1]

(iii) What is the probability that the counter is blue?

(iii) _____ [1]

- (b)** Another box contains 9 green counters and 10 orange counters.
Lydia puts some more green counters into the box.
She then takes a counter from the box without looking.

The probability that the counter is green is $\frac{3}{5}$.

How many more green counters did Lydia put into the box?

(b) _____ [2]

14 Solve.

(a) $\frac{x}{5} = 8$

(a) $x =$ _____ [1]

(b) $3x + 5 = 26$

(b) $x =$ _____ [2]

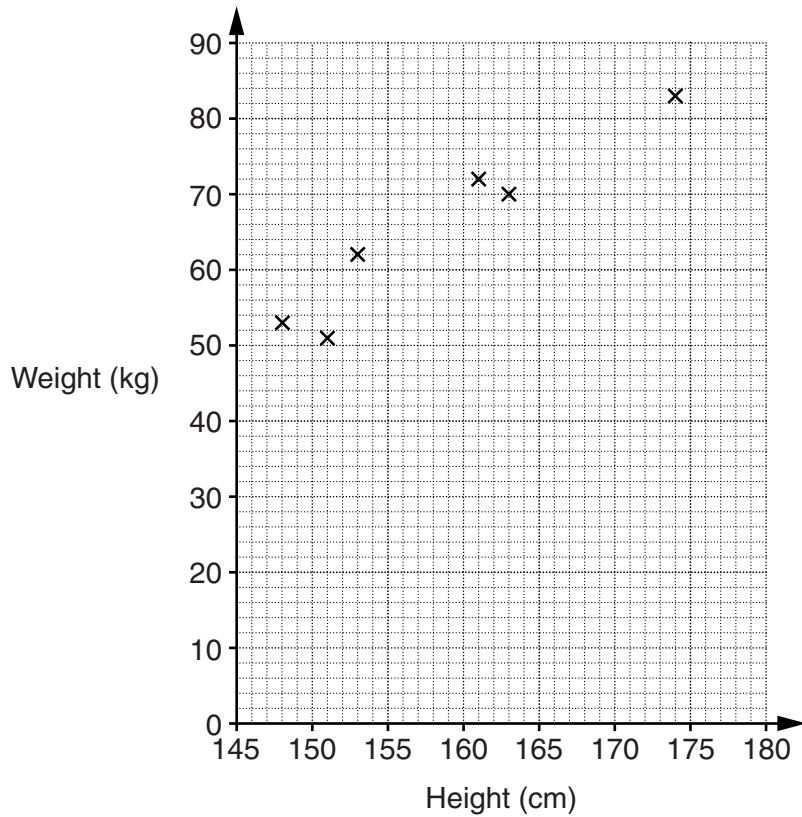
(c) $5x - 2 = 3x + 7$

(c) $x =$ _____ [3]

15 The heights and weights of ten Year 11 girls are recorded in this table.

Height (cm)	161	148	151	174	153	163	155	168	173	164
Weight (kg)	72	53	51	83	62	70	70	76	75	79

The data for the first six girls is plotted on the scatter graph.



(a) Complete the scatter graph. [2]

(b) Describe the correlation shown.
 _____ [1]

(c) (i) Draw a line of best fit on your graph. [1]

(ii) Another girl in Year 11 has a height of 159 cm.
 Use your line of best fit to estimate her weight.

(c)(ii) _____ kg [1]

16 (a) Write as a decimal.

(i) $\frac{3}{50}$

(a)(i) _____ [1]

(ii) $\frac{2}{9}$

(ii) _____ [1]

(b) Work out.

(i) $\frac{5^2 \times 5^5}{5^4}$

(b)(i) _____ [2]

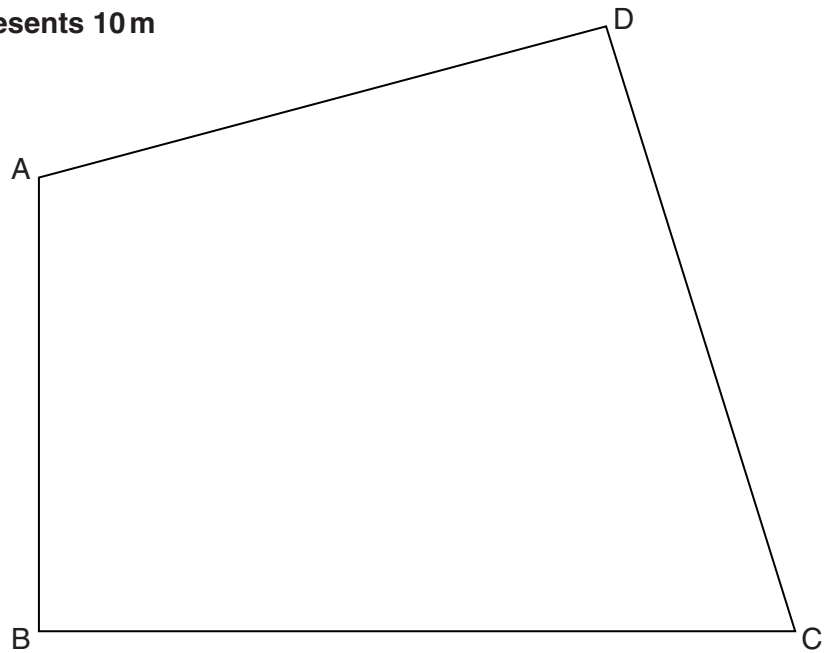
(ii) $3\frac{1}{3} - 1\frac{5}{6}$

Give your answer in its simplest form.

(ii) _____ [3]

17 The scale drawing shows a field ABCD.

Scale: 1 cm represents 10 m



Tom pitches his tent in the field.

The tent is pitched

- closer to AB than to AD
- more than 50m from C.

Construct and shade the region where Tom's tent could be pitched.
Leave in all your construction lines.

[4]

- 18 Nita is making a fruit drink.
She mixes apple juice and mango juice in the ratio 3 : 1.

(a) How much of each type of juice will she need to make 1 litre of the fruit drink?
Give your answers in millilitres.

(a) Apple juice _____ ml

Mango juice _____ ml [2]

- (b)* Apple juice costs 56p for a 1-litre carton.
Mango juice costs £1.20 for a 1-litre carton.
A pack of 80 plastic cups costs £1.

Nita sells her fruit drink at a school concert in 250 ml cups for 60p each.
She gives all the **profit** she makes to the school fund.
Nita makes 80 cups of the fruit drink and sells them all.

How much money does she give to the school fund?

(b) _____ [5]

TURN OVER FOR QUESTION 19

19 (a) Here are the first four terms of a sequence.

8 11 14 17

Write an expression for the n th term of this sequence.

(a) _____ [2]

(b) The n th term of another sequence is given by $12 - 5n$.

Write down the first three terms of this sequence.

(b) _____, _____, _____ [2]

BLANK PAGE

PLEASE DO NOT WRITE ON THIS PAGE

PLEASE DO NOT WRITE ON THIS PAGE



Copyright Information

OCR is committed to seeking permission to reproduce all third-party content that it uses in its assessment materials. OCR has attempted to identify and contact all copyright holders whose work is used in this paper. To avoid the issue of disclosure of answer-related information to candidates, all copyright acknowledgements are reproduced in the OCR Copyright Acknowledgements Booklet. This is produced for each series of examinations and is freely available to download from our public website (www.ocr.org.uk) after the live examination series.

If OCR has unwittingly failed to correctly acknowledge or clear any third-party content in this assessment material, OCR will be happy to correct its mistake at the earliest possible opportunity.

For queries or further information please contact the Copyright Team, First Floor, 9 Hills Road, Cambridge CB2 1GE.

OCR is part of the Cambridge Assessment Group; Cambridge Assessment is the brand name of University of Cambridge Local Examinations Syndicate (UCLES), which is itself a department of the University of Cambridge.